

McConochie Generic Battery (McGB) – Spatial Aptitude Test

Copyright 2004 William A. McConochie, PhD
TestMaster, Inc., 71 E. 5th Ave., Eugene, OR 97401
Phone: (541) 686-9934; Email: bill@testmasterinc.com

Name: (last) _____, (first) _____

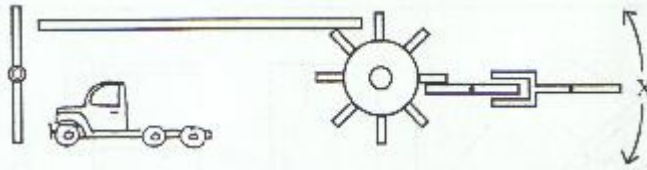
Age: _____ Gender: Male or Female (circle one)

For each of the items below, circle the number of the one correct answer.

- 1 2 3 4 1. It is January 1st, 12 noon, and the sun is halfway between the horizon and overhead and is in your eyes. Which direction are you traveling?
(1) East. (2) West. (3) North. (4) South.


- 1 2 3 4 2. If you are driving west and then make a left turn, another left turn and then three right turns, what direction will you be going?
(1) East. (2) West. (3) North. (4) South.

- 1 2 3. Which way will "X" move when truck drives forward?



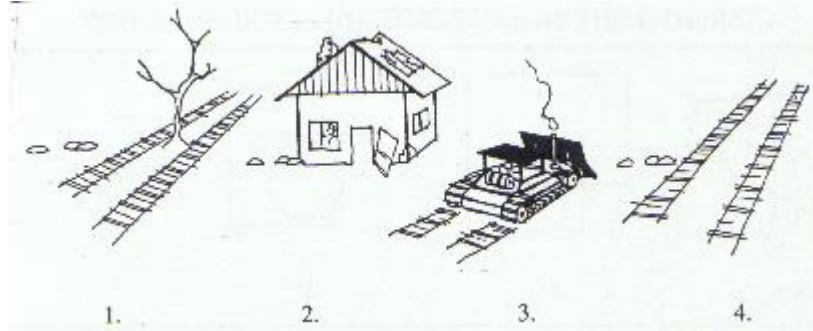
- (1) Up. (2) Down.

- 1 2 4. Which way should you move the wrench handle to loosen the nut below?



- (1) Away from you. (2) Toward you.

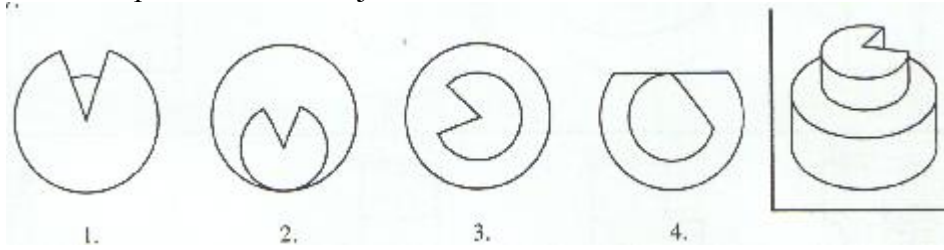
- 1 2 3 4 5. To make the most sensible story, which of each 4 pictures should go last?



Please turn the page and continue...

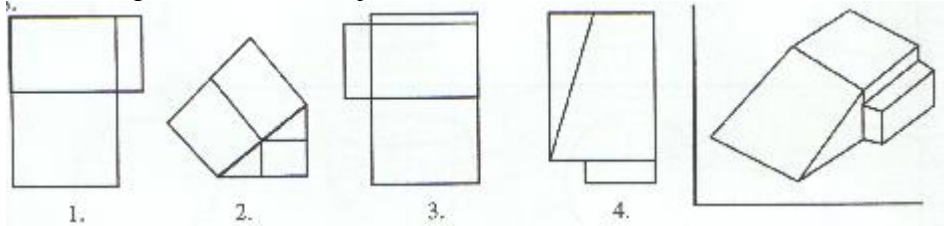
1 2 3 4

6. Which is a top view of each object?



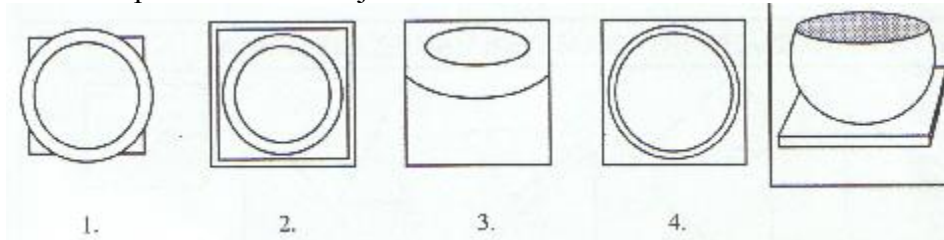
1 2 3 4

7. Which is a top view of each object?



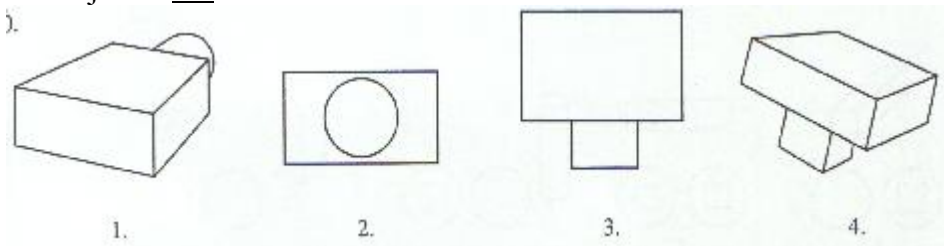
1 2 3 4

8. Which is a top view of each object?



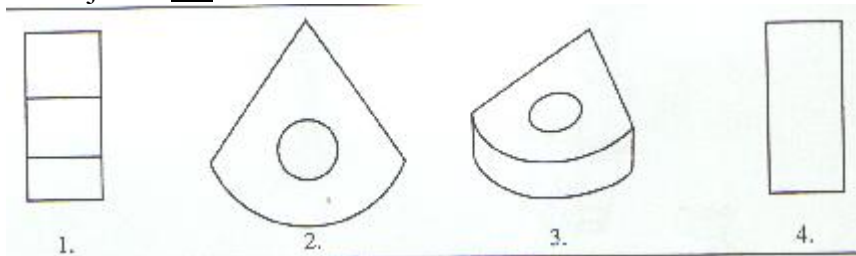
1 2 3 4

9. Which object is not the same as the others?



1 2 3 4

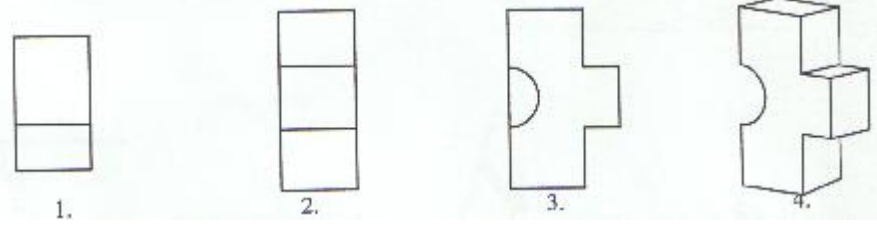
10. Which object is not the same as the others?



Please turn the page and continue...

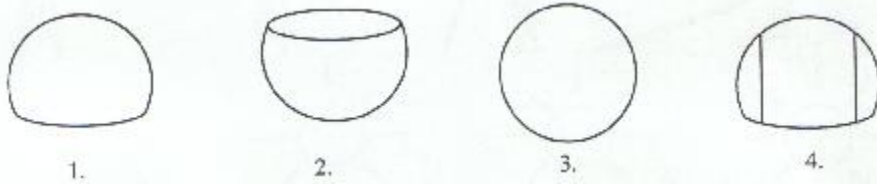
1 2 3 4

11. Which object is not the same as the others?



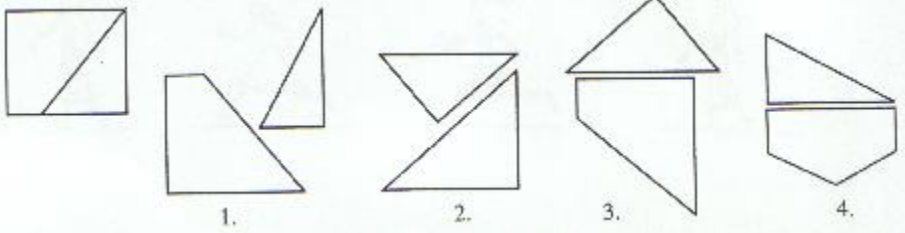
1 2 3 4

12. Which object is not the same as the others?



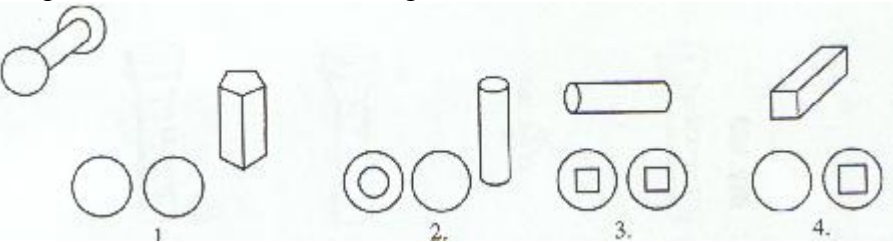
1 2 3 4

13. Which pieces can best make the shape?



1 2 3 4

14. Which pieces can best make the shape?



1 2 3 4

15. What should the boy do from his point of view to avoid falling over?



- (1) Put on his brakes.
- (3) Turn to his right, then to his left.

- (2) Turn to his right.
- (4) Turn to his left.

Please turn the page and continue...


1 2 3 4

16. Which girl has worked the most if all logs weigh the same?



1 2 3 4

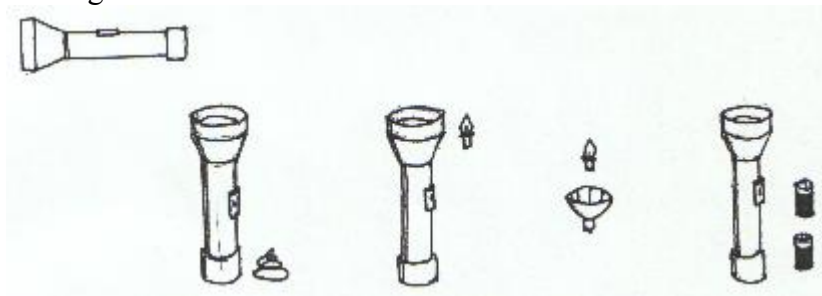
17. Which girl is the warmest?



1 2 3 4

18. Which two things should be put together first to make the object?

Flashlight:



1 2 3 4

19. Which two things go together first to make the end result?


Pancakes:



Please turn the page and continue...

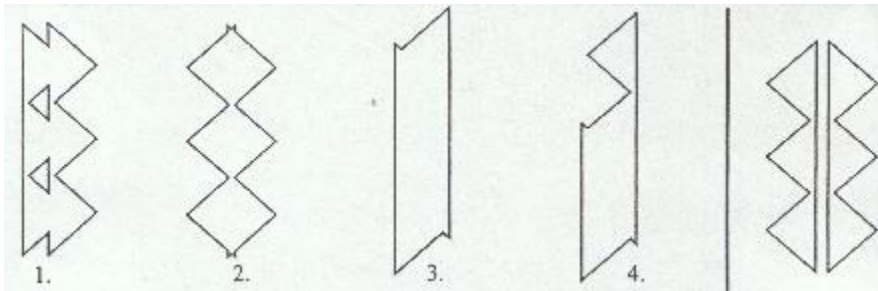
1 2 3 4

20. Which two things go together first to make the end result?
Potted plant:



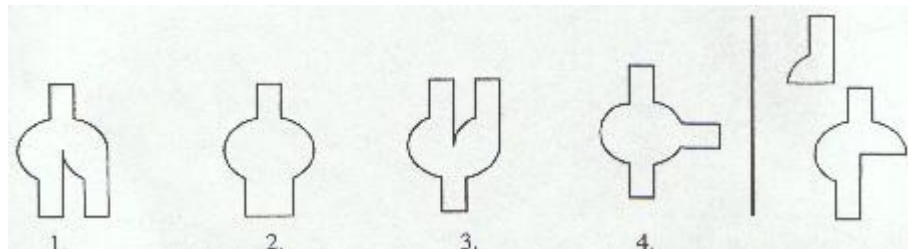
1 2 3 4

21. Which shape can be made with the two pieces, without overlapping or turning them over?



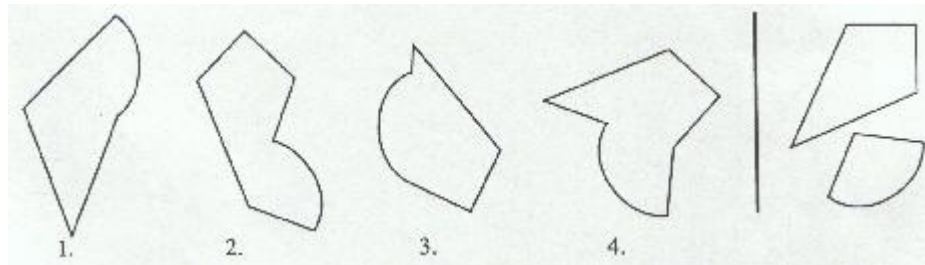
1 2 3 4

22. Which shape can be made with the two pieces, without overlapping or turning them over?



1 2 3 4

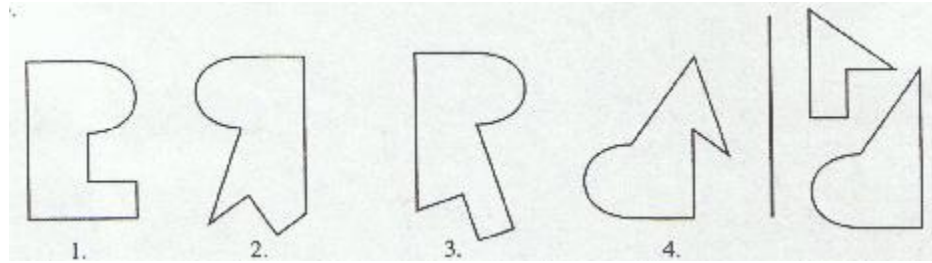
23. Which shape can be made with the two pieces, without overlapping or turning them over?




Please turn the page and continue...

1 2 3 4

24. Which shape can be made with the two pieces, without overlapping or turning them over?



Answer the following questions (25 – 30) by studying the picture/scene. Make your best judgments, assuming the picture is a real scene.



- 1 2 25. The airplane closest to you is larger than the one further away from you.
(1) True. (2) False.
- 1 2 26. The airplane nearest you must turn left to land at the airport.
(1) True. (2) False.
- 1 2 27. The season is more likely fall than spring.
(1) True. (2) False.
- 1 2 28. The airliner is flying north.
(1) True. (2) False.
- 1 2 29. The person waving at you is flying into the wind.
(1) True. (2) False.

Please turn the page and continue...

12

30. If it were 7:00 AM, the sun would be to your right.
(1) True. (2) False.

Now, please check to make sure you have answered every item with only one number clearly circled (don't put circles between numbers).

Copyright 2004, William A. McConochie, Ph.D.